

ARMY PUBLIC SCHOOL BATHINDA, MIL STN

HOLIDAY HOMEWORK WINTER BREAK

SESSION-(2023-2024)

CLASS II

English	<ul style="list-style-type: none"><li>• Learn and write a Poem: If you Should Meet A Crocodile ( Draw and colour the picture)</li><li>• Reading of Ch- 9 Bholaram's Magic Repair Toy Shop</li></ul>
Hindi	<ul style="list-style-type: none"><li>• हिन्दी गुंजन चिड़िया का गीत कविता लिखो , याद करो व एक सुंदर चित्र कॉपी में बनाओ।</li><li>• पाठ-14 शेरुदा पढ़ो।</li></ul>
Maths	<ul style="list-style-type: none"><li>• Do page no 148, 151 &amp; 152 ( to be done in the book only.)</li></ul>
EVS	<ul style="list-style-type: none"><li>• Do book pages 101,108 and 119.</li></ul>



Happy  
Holidays



Poem

## If You Should Meet a Crocodile

### Read and Enjoy☆☆☆

Recite the following poem with the teacher and then in groups.

If you should meet a crocodile  
Don't take a stick and **poke** him;  
Ignore the welcome in his smile,  
Be careful not to **stroke** him.  
For as he sleeps upon the **Nile**,  
He gets thinner and thinner,  
When'er you meet a crocodile  
He's looking for his dinner.

-Christine F Fletcher



9


# Bholaram's Magic Repair Toy Shop



A. Look at the given pictures and tick (✓) the kinds of toys you have, or you would like to play with.



Clay toys



Battery-operated toys



Soft toys



Wooden toys

B. Write the name of your favourite toy. \_\_\_\_\_

## Read and Enjoy

Bholaram was an old man. He lived alone in a cottage. He smiled and greeted everyone with a ready 'Hello'.

Bholaram ran a small toy **repair** shop from his house. People said that he knew some kind of magic. He was able to repair all the toys, even those that came to him in a very bad condition. So, people called his shop the Magic Toy Repair Shop.

When the children came to his shop with broken toys, they looked sad. But when they took back the toys, each one had a **broad smile** and said, 'Thank you, Bholaram uncle.'

repair	to put right to a good condition
broad smile	big smile


Let us see what happened one day....

Oh! Let me change the broken wheel of this car. Here you go! It can run now and all the other toys are also repaired. The children will come for them tomorrow morning. I should take some rest now.




After some time, the toys talk to one another...

Look friends! I have a new wheel. My friend, Gagan, will pick me up tomorrow. He will play with me again.




Hey! My arm is all right now. I can move it freely. Suhani will take me home in the morning. She was changing my dress when my arm came off. And she cried a lot for me. Now, she will be happy. She loves me the most of all her toys!





All right, dear friends, I can see you all clearly now. I belong to Johnny. His mother put me into the washing machine to wash me. And I moved round and round. One of my eyes came out. Johnny was very sad. He came here with me. I am his favourite!

Oh! Come on! Listen to me, everyone. I am Raghu's toy. He never took good care of me. He kept me carelessly. His grandmother had gifted me to Raghu on his birthday. When my whistle and lights broke, she scolded Raghu. He brought me to this shop. I hope that he will love me now.




I am sure he will love you well. I am Rena's toy. One day, she was angry. She threw me on the floor and my beak broke. I was in a lot of pain. But, after some time, she felt sorry for me and carried me to this place. She also hugged me. I wish all the children keep their toys carefully and do not throw away any toy in anger.



Next morning...

Hello children!  
All of you have got your toys now.  
Take good care of them.



Yes, we will. Thank you, Bholaram uncle. You are great!

## 13 चिड़िया का गीत

चर्चा करें— ❁ सुबह होने पर आसमान में, पेड़ों पर, छज्जों पर, घर की मुँडेर पर क्या देखते हैं?  
❁ चिड़िया अपने क्या-क्या काम खुद करती है? ❁ सुबह के समय चिड़ियों की आवाज़ सुनकर कैसा लगता है?

छोटी-सी चिड़िया बहुत मेहनती होती है, जो तिनके जोड़-जोड़कर अपना घोंसला बनाती है। वह हमेशा खुश रहती है और यही सीख देती है।



सूरज के उगते ही चिड़िया  
मीठा गीत सुनाती है  
चूँ-चूँ चीं-चीं बोल-बोलकर  
सबको खुश कर जाती है।

दूर-दूर तक पर फैलाकर  
दाना चुगने जाती है  
तिनका-तिनका चुनकर कैसे  
अपना नीड़ बनाती है।



सरदी, गरमी, वर्षा को भी  
हँसकर वह सह लेती है  
आप खुशी से जीती है  
और खुशियाँ ही फैलाती है।





## 14 शेरूदा

**चर्चा करें—** ❁ जंगल का राजा कौन कहलाता है? ❁ शेर कहाँ रहता है? शेर क्या खाना पसंद करता है? ❁ अपना काम स्वयं करना क्यों अच्छा है?

मेहनत करने से हम दूसरों के भरोसे नहीं रहते हैं। अपना काम अपने आप करने से आत्मविश्वास बढ़ता है। अपना काम खुद करने की आदत बनाना अच्छी बात है।

शेरूदा बहुत बड़ा शेर था। वह जंगल का राजा था। वह बहुत आलसी हो गया था। मेहनत नहीं करना चाहता था। इसी कारण भोजन के लिए शिकार भी नहीं करता था। जंगल के सभी पशु-पक्षी उसके लिए भोजन लेकर आते थे।



एक दिन शेरूदा को बहुत भूख लग रही थी। “मुझे खाना दो, मैं भूखा हूँ,” गर-र-र-र वह गुर्गिया।

एक छोटा खरगोश कूदता हुआ आया। “शेरूदा, एक लाल गाजर खाओगे? खेत से अभी निकालकर लाया हूँ,” उसने पूछा।

“चले जाओ! गाजर तो खरगोश खाते हैं। मुझे भोजन चाहिए। मैं भूखा हूँ ग...र...र...,” शेरूदा चिल्लाया।


एक हरा तोता उड़कर आया। तोते ने पूछा, “क्या यह आम खाओगे? बड़ा मीठा और रसीला है।” उसकी चोंच में एक पीला आम था।



शेरूदा गुस्से में बोला, “नहीं, नहीं, नहीं! आम तो तोते खाते हैं। ग...र...र... मुझे अपना भोजन चाहिए। मैं भूखा हूँ।” वह बहुत देर तक दहाड़ता रहा।

एक भूरा बंदर भागता हुआ आया। उसने कहा, “शेरूदा, शेरूदा! लो, यह मूँगफली खाओ। तुम्हारी भूख मिट जाएगी।”

“नहीं, नहीं, नहीं! मुझे भोजन चाहिए। ग...र... र...,” शेरूदा फिर गुर्राया।



इतने में एक शेरनी वहाँ आई।  
उसने शेर से पूछा, “शेरूदा,  
क्या बात है? तुम इतने  
दुखी क्यों लग रहे हो?”



शेरूदा ने उत्तर दिया, “मैं  
दो दिन से भूखा हूँ। कहीं से भी  
मेरी पसंद का खाना नहीं मिला। मुझे समझ में नहीं आता, मैं क्या  
करूँ। मेरे पेट में चूहे कूद रहे हैं।”

शेरनी बोली, “तुम मांसाहारी तो हो, लेकिन आज फल-सब्जियाँ  
भी खाकर देखो। मैंने सुना है जंगल में बहुत अच्छे फल होते हैं।”

शेरूदा पहले गुराया फिर बोला, “हाँ, हाँ, झटपट लाओ। मैं  
भूखा हूँ। आज मैं फल सब्जियाँ भी खाने की कोशिश करूँगा।  
ग... र... र...”

शेरनी शेरूदा के लिए खूब सारे फल ले आई। खरगोश,  
बंदर और तोता भी आ गए। शेरूदा ने कुछ फल-सब्जियाँ  
खाईं। फिर शेरनी से बोला, “आज मुझे समझ में आ गया कि  
फल-सब्जियाँ भी बहुत अच्छी होती हैं! लेकिन यह मेरा भोजन  
नहीं है।” वह जंगल की ओर जाने लगा कि शेरनी बोली, “शेरूदा,  
आगे से तुम अपना भोजन स्वयं तलाश करना। दूसरों के भरोसे रहना  
ठीक नहीं।”

**Funpedia**

I. You all must have seen a rainbow in the sky after rains. Find out why and how rainbow is formed. Why are they not formed after every rainfall? Colour the given rainbow following the VIBGYOR pattern.

Violet

Indigo


Blue

Green


Yellow

Orange

Red



II. Name the season in which you can do following activities.



Floating paper-boats

2.



Picnic in the garden



Swimming in the pool

4.



Making snowman

Values: The Building Blocks of Life

**Do's and Don'ts in different seasons.**

1. Do not eat roadside food items in the summer season. Food gets spoiled quickly in summers.
2. Do not drink unfiltered water, sugar cane juice, and other drinks which are not prepared by filtered water in summers. It can upset your stomach.
3. Do not play outside during afternoon in summers as you can catch loo and fall sick.
4. Do not eat cold things, play out in the evening during winters as you can catch cold.

## HOTS

Dirty and impure air affect the monuments too. Is it true? Give an example of a monument which is getting affected by polluted air.

## Funpedia

I. Colour the given picture of a windmill and hot air balloon.



Values: The Building Blocks of Life

June 8<sup>th</sup> is celebrated as **Clean Air Day** in some countries. It is dedicated to celebrating environment friendly programmes and activities. You, as small children can also do a bit for making the air clean.

*5/11/01*  
**Do you share for Cleaner air?**

Ride your bike, Take a hike.

Do your share for cleaner air

Ride on the bus. Carpool with us.

Grow some plants. Walk with us.

Share your concern for the cleaner air.

# EXERCISES

## I. Tick (✓) the correct option:

- It is an outdoor game.
  - a. Football
  - b. Hockey
  - c. Volleyball
  - d. All of these ✓
- Chess is played between .....2..... people.
  - a. 2 ✓
  - b. 4
  - c. 6
  - d. 8
- Indoor games can be played in ....All...weathers.....
  - a. Day
  - b. Night
  - c. All weathers ✓
  - d. All of these
- Which of the following is not a recreational activity?
  - a. Dancing
  - b. Singing
  - c. Collecting stamps
  - d. Doing homework ✓
- While playing games we must not:
  - a. Tell lies ✓
  - b. Develop good sportsmanship
  - c. Obey rules
  - d. Develop good team spirit

## II. Write (I) for indoor and (O) for outdoor games:



## III. Fill in the blanks:

- My favourite recreational activity is *Dancing*...
- Playing games keeps us *healthy*... and *fit*.....
- Watching too much TV can harm our *eyes*.....
- We must have a balance between studies and *playings*....
- Play games with good *team*..... spirit.

3. Name the shape of objects shown below. One has been done for you.

a.



cylinder

b.



book

c.



box

d.



carrot

e.



party hat

f.



ball

4. Complete the following table.

Shapes	Faces	Edges	Vertices
Cuboid			
Cube			
Cylinder			
Cone			
Sphere			

5. Fill in the blanks. Take help from the word box.

- A square has all four sides equal.
- A ball is an example of a sphere.
- A triangle has three sides.
- A tubelight has a rectangular shape.
- Opposite sides of a rectangle are equal.
- A birthday cap is of conical shape.
- A circle has no sides.

circle  
cylindrical  
conical  
triangle  
ball  
rectangle  
square



## TEST YOUR SKILLS

### Multiple Choice Questions

1. Which among the following is a standard unit of measurement?  
a. Cubit                      b. Metre                      c. Handspan                      d. Pace
2. Which of the following can be measured in gram?  
a. An elephant                      b. A boy                      c. A pencil                      d. An apple
3. We measure a spoon of medicine in  
a. mL                      b. L                      c. g                      d. m
4. A cube has \_\_\_\_ faces and \_\_\_\_ edges.  
a. 4, 8                      b. 3, 2                      c. 6, 12                      d. 2, 1
5. Its sides may or may not be equal. It is the property of a  
a. Square                      b. Triangle                      c. Rectangle                      d. Circle

### Origami

Cut out small shapes like squares, rectangles,



a. Triangles

b. Circles



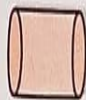
# APPLY YOUR SKILLS



## PROBLEM SOLVING QUESTIONS

1. Match the following objects with their shapes.

a. Soft drink can



b. Globe



c. Match box



d. Dice



e. Chalk



f. Pencil box

g. Football

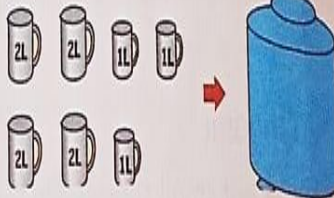
h. Birthday cap

2. Complete the blanks.


a. The weight of 1 watermelon is equal to \_\_\_\_\_ apples.



b. The capacity of the drum is \_\_\_\_\_ litres.



c.



The paintbrush is \_\_\_\_\_ cm long.

3. Solve the following:

	cm	kg	g	L	mL	L	mL	m	cm				
a.	55	b.	223	25	c.	87	550	d.	15	250	e.	20	22
	+ 39		+ 178	62		- 59	462		+ 10	120		- 15	16
	<hr/>		<hr/>			<hr/>			<hr/>			<hr/>	